










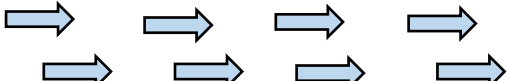
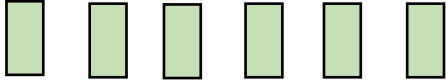







Rozwiąż działanie i samodzielnie sprawdź wynik.

DZIAŁANIE	KARTA ODPOWIEDZI	DZIAŁANIE	KARTA ODPOWIEDZI
$2 + 1 = \dots\dots\dots$		$2 - 1 = \dots\dots\dots$	
$2 + 2 = \dots\dots\dots$		$2 - 2 = \dots\dots\dots$	
$4 + 1 = \dots\dots\dots$		$4 - 1 = \dots\dots\dots$	
$3 + 2 = \dots\dots\dots$		$3 - 2 = \dots\dots\dots$	
$5 + 3 = \dots\dots\dots$		$5 - 3 = \dots\dots\dots$	
$9 + 1 = \dots\dots\dots$		$9 - 1 = \dots\dots\dots$	
$7 + 1 = \dots\dots\dots$		$7 - 1 = \dots\dots\dots$	
$6 + 3 = \dots\dots\dots$		$6 - 2 = \dots\dots\dots$	
$2 + 8 = \dots\dots\dots$		$8 - 0 = \dots\dots\dots$	
$8 + 1 = \dots\dots\dots$		$8 - 1 = \dots\dots\dots$	